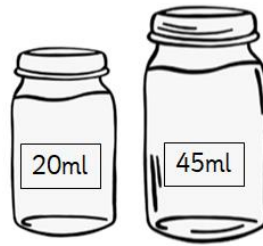


Unit 12: Lesson 5

Name _____

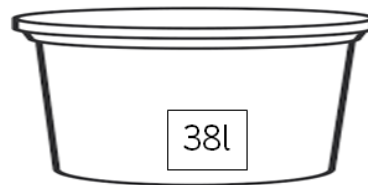
Guided Learning Task (solve the problems)

1.



How much altogether? _____

2.



Kim pours 15 litres out. How much is left? _____

Guided Learning Task 2 (solve the problem)

1.



Kim's mum is putting petrol in the car.

The tank holds 58 litres.

So far she has put 52 litres into it.

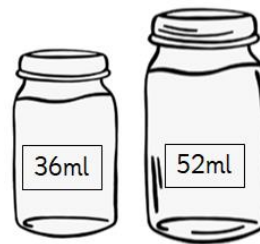
How much more can she put in before it is full?

Independent (How much in the two containers altogether?)

1.



2.



How much left if we pour 10 ml out of these?

3.



4.



5.



6. Ali mixes 14 litres of blue paint with 5 litres of yellow paint to make green paint.

How many litres of green paint will she have?



7. A bucket holds 45 litres of water.
Another bucket holds 4 litres less than this.
How much does the second bucket hold?



8. Tom has three buckets that hold 5 litres, 3 litres and 1 litre.
By combining them how many different amounts can he make?
Find them all.

