



Unit 27: Lesson 5 Deeper Learning Task

This is 0.4 of a bag of sweets.




How many sweets are in the full bag?

This is 0.4 of a bag of sweets.




How many sweets are in the full bag?

This is 0.4 of a bag of sweets.



How many sweets are in the full bag?

This is 0.4 of a bag of sweets.



How many sweets are in the full bag?