

Unit 11: Lesson 1

Name _____

Guided Learning Task 1 (complete the calculations. Use base 10 materials to help)

1. $56 + 10 =$ _____

2. $38 + 10 =$ _____

3. $72 - 10 =$ _____

4. $29 - 10 =$ _____

5. _____ $+ 10 = 68$

6. _____ $- 10 = 39$

Guided Learning Task 2 (write the missing numbers on the 100 square)

1.

31	32	33

2.

36	37	38

3.

46	47	48

4.

		43
	52	
61		

5.

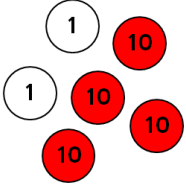
72		
	93	94

6.

	59	

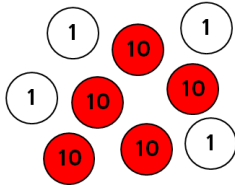
Guided Learning Task 3 (complete the calculations using the place value counters)

7.



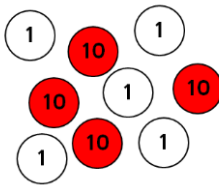
$42 + 10 =$ _____

8.



$54 - 10 =$ _____

9.



$45 - 10 =$ _____

Independent Learning

(Complete the calculations)

1. $29 + 10 = \underline{\quad}$

2. $63 + 10 = \underline{\quad}$

3. $27 + 10 = \underline{\quad}$

4. $38 - 10 = \underline{\quad}$

5. $92 - 10 = \underline{\quad}$

6. $55 - 10 = \underline{\quad}$

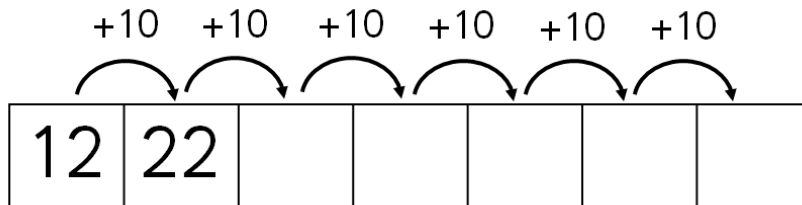
7. $\underline{\quad} + 10 = 32$

8. $\underline{\quad} + 10 = 99$

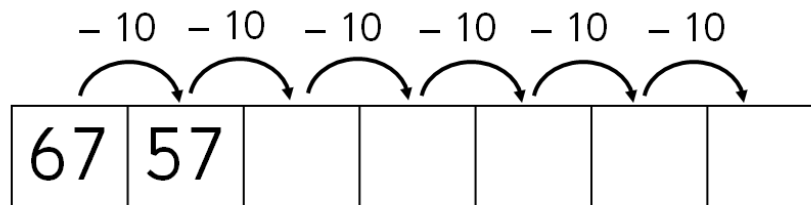
9. $\underline{\quad} - 10 = 45$

(Continue the sequences)

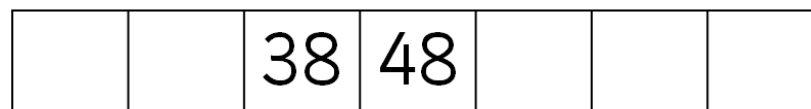
1. This number sequence adds 10 each time.



2. This number sequence takes 10 away each time.



3. Continue the sequence



4. Continue the sequence

