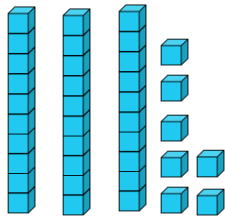
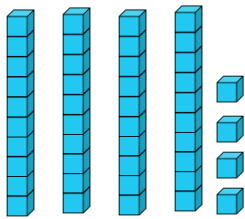


**Guided Learning Task 1** (write the answers on the line)



$$- 10 = \underline{\hspace{2cm}}$$



$$- 10 = \underline{\hspace{2cm}}$$

$$17 - 10 = \underline{\hspace{2cm}}$$

$$22 - 10 = \underline{\hspace{2cm}}$$

**Guided Learning Task 2** (write the answers on the line)



Spend **10p**

Now \_\_\_\_\_ p left.



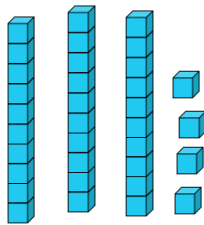
Ribbon **27cm** long.

**10cm** cut off

Ribbon is now \_\_\_\_\_ cm long.



**Independent Learning** (write the answers on the line)



$$- 10 = \underline{\hspace{2cm}}$$

$$42 - 10 = \underline{\hspace{2cm}}$$

Ben has 21 grapes.

He eats **10** grapes.

How many grapes are left? \_\_\_\_\_

What numbers could you use?

$$\underline{\hspace{2cm}} - 10 = \underline{\hspace{2cm}}$$